




Maths Challenge

Friday Order numbers.

Problem 1.

Complete the image and match the numerals to the correct picture.

<input type="text"/>	11, 17, 19	14, 12, 5
		

Order the numbers in each group from smallest to largest.

Order all of the numbers from smallest to largest.

Problem 2.

Mr Monaghan says,



What could his number be?